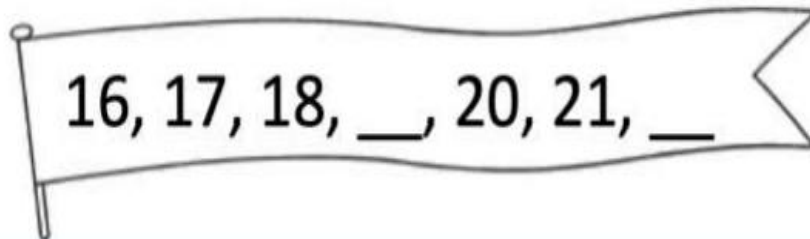


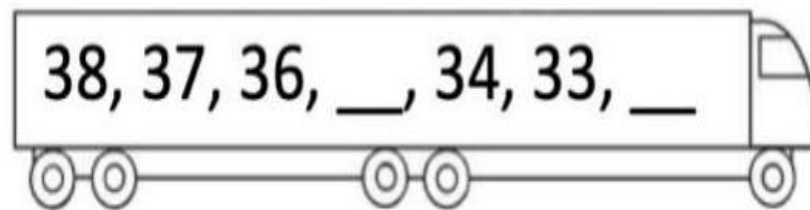
2's	5's	10's
2	5	10
4	10	20
6	15	30
8	20	40
10	25	50
12	30	60
14	35	70
16	40	80
18	45	90
20	50	100

Once you have watched the lesson video, try your task below.


For your task you need to complete the pattern by finding out if it increases or decreases and by how many each time.



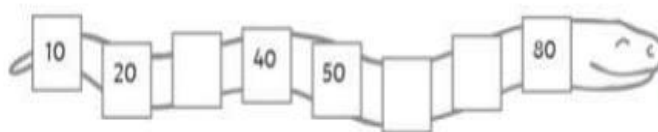
The pattern increases / decreases. (circle one)



The pattern increases / decreases. (circle one)

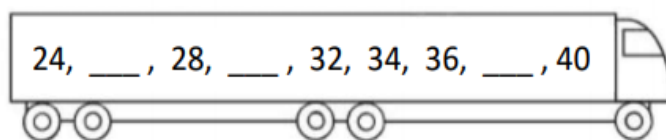


The pattern increases / decreases. (circle one)



The pattern is counting in 2s / 5s / 10s (circle one)

Extension- Can you complete these sequences with bigger numbers?



The pattern is counting in 2s / 5s / 10s (circle one)



The pattern is counting in 2s / 5s / 10s (circle one)