



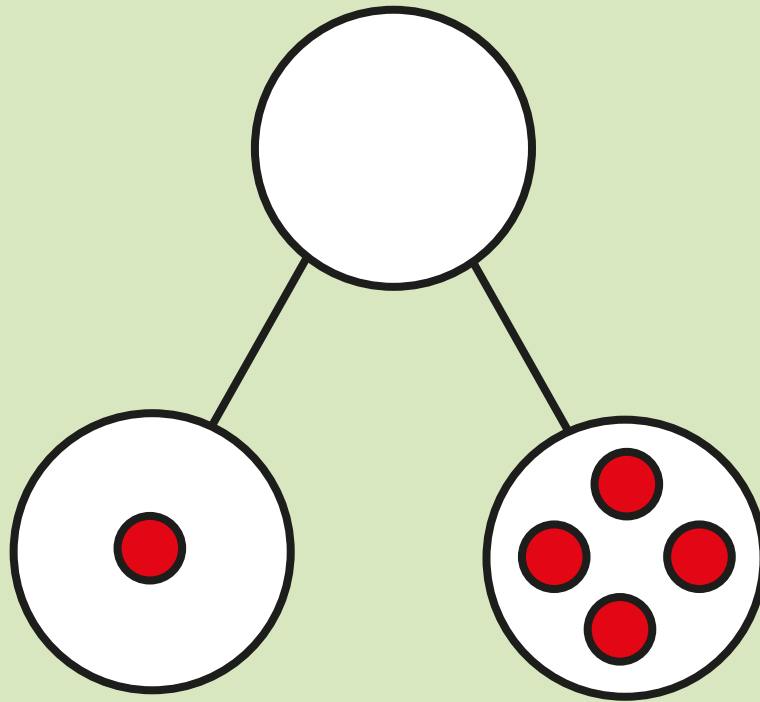
ADDITION AND SUBTRACTION (WITHIN 10)

White
Rose
Maths


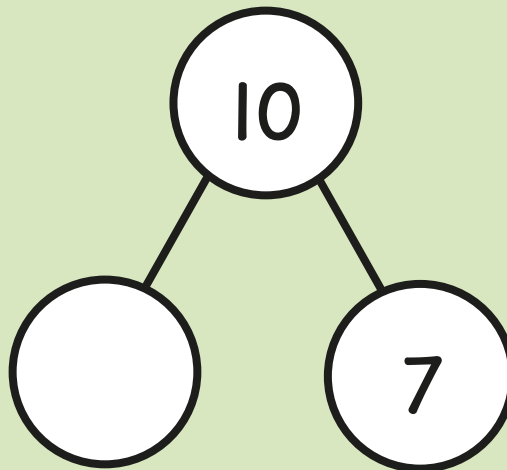


From White Rose Maths schemes for Year 1 Autumn Term
BLOCK 2 - ADDITION AND SUBTRACTION (WITHIN 10)

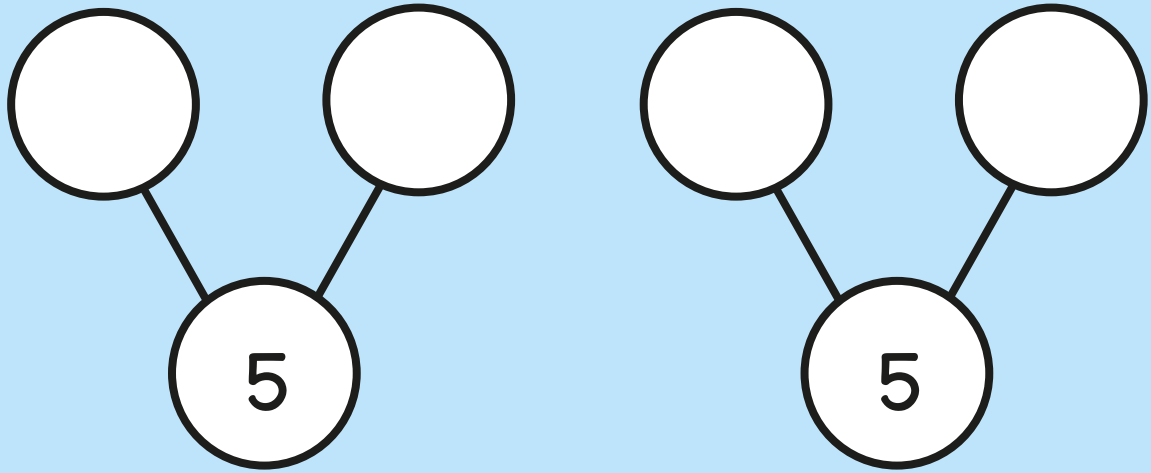
- 1 Draw counters to complete the part-whole model.




- 2 Complete the part-whole model.



- 3 Complete the part-whole models.
Find two different ways.

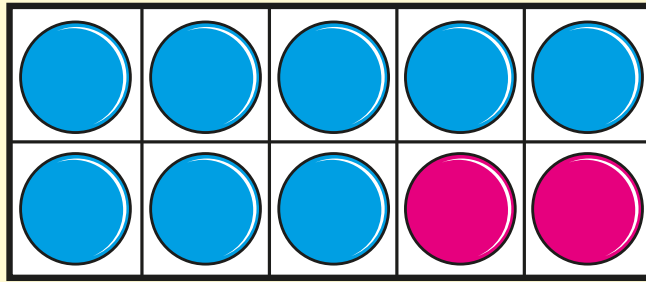


- 4 Use the picture to complete the number sentence.



$$\boxed{7} - \boxed{} = \boxed{}$$

5 Complete the number bond.



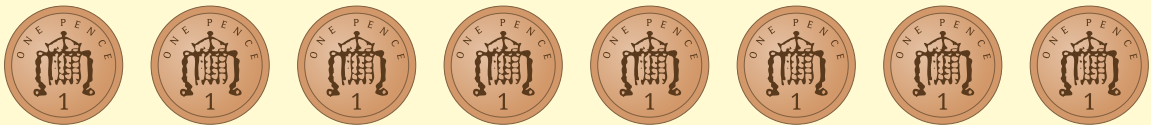
$$10 = 8 +$$



6 Jack has 8 pennies.

He spends 3 pennies.


How many pennies does he have left?




pennies

7 Rosie spends 10p.


Circle the two items she buys.



4p



5p



6p



7p


- 8 Use the picture to help you complete the number sentences.

$$2 + 5 = \square$$

$$5 + \square = 7$$

$$\square = 2 + 5$$

$$2 = 7 - \square$$



- 9 Write $<$, $>$ or $=$ to complete the number sentences.

$$6 + 2 \quad \bigcirc \quad 7 + 2$$

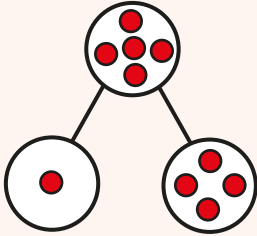
$$8 - 0 \quad \bigcirc \quad 8 - 2$$



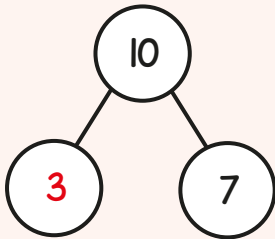
Answers



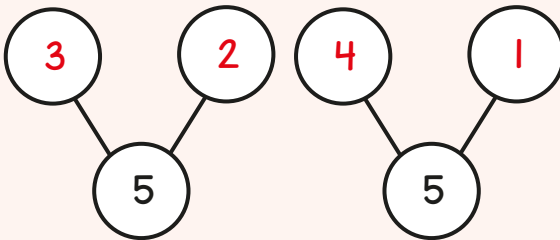
1



2



3



4

$$7 - 4 = 3$$

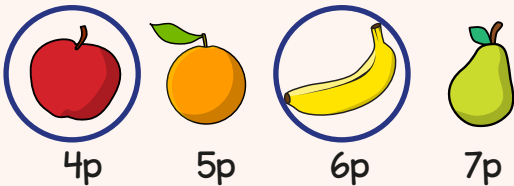
5

$$10 = 8 + 2$$

6

5 pennies

7



8

$$2 + 5 = 7$$

$$5 + 2 = 7$$

$$7 = 2 + 5$$

$$2 = 7 - 5$$

9

$$6 + 2 < 7 + 2$$

$$8 - 0 > 8 - 2$$

